

1

Learning Activity Sheet for Mathematics

Quarter

Week

1

Learning Activity Sheet: Mathematics Grade 1 Quarter 1: Week 1

This material is intended exclusively for the use of teachers in the implementation of the MATATAG K to 10 Curriculum. It aims to assist in delivering the curriculum content, standards, and lesson competencies.

The Intellectual Property Code of the Philippines states that “No copyright shall subsist in any work of the Government of the Philippines. However, prior approval of the government agency or office wherein the work is created shall be necessary for exploitation of such work for profit. Such agency or office may, among other things, impose as a condition the payment of royalties.”

Borrowed materials (e.g., texts, illustrations, musical notations, photos, and other copyrightable, patentable contents) included in this learning resource are owned by their respective copyright and intellectual property right holders. Where applicable, DepEd has sought permission from these owners specifically for the development and printing of this learning resource. As such, using these materials in any form other than agreed framework requires another permission and/or licensing.

No part of this material, including its original and borrowed contents, may be reproduced in any form without written permission from the Department of Education.

Every care has been taken to ensure the accuracy of the information provided in this material. For inquiries or feedback, please call the Office of the Director of the Department of Education – National Capital Region via telephone number (02) 85229412 or send an email to ncr@deped.gov.ph.

Published by the Department of Education
Secretary: Sara Z. Duterte
Undersecretary: Gina O. Gonong

Development Team

Enhance:	Gina L. Aguitez
Content Reviewer:	Gina L. Aguitez, Remyllinda T. Soriano, Helen S. Acedo
Mechanical Editor:	Gina L. Aguitez, Remyllinda T. Soriano, Helen S. Acedo, Emma R. Cunanan
External Language Validator:	Rafael John Sotto
Illustrator:	Gina L. Aguitez, Helen S. Acedo
Layout Artist:	Gina L. Aguitez, Vergel Junior C. Eusebio

Management Team

JOCELYN DR ANDAYA, *CESO IV*, Director IV
CRISTITO A. ECO, *CESO III*, Assistant Regional Director
MICAH G. PACHECO, OIC-Chief Education Program Supervisor, CLMD
DENNIS M. MENDOZA, Regional EPS/Learning Resource Management Section Head
RESTY I. RODELAS, Regional Mathematics Education Program Supervisor
DAISY L. MATAAC, SDO Taguig City & Pateros LRMS Education Program Supervisor
ELSA R. MATA, SDO Navotas LRMS Education Program Supervisor

Department of Education – National Capital Region (DepEd- NCR)

Office Address: 6 Misamis St, Bago Bantay, Quezon City
Metro Manila, Philippines, 1105
Telefax: (02) 85229412
Email Address: ncr@deped.gov.ph





Misamis St., Bago Bantay, Quezon City
(02) 85229412
ncr@deped.gov.ph
<https://www.depedncr.com.ph>

LEARNING ACTIVITY SHEET 1

Am I a Rectangle?

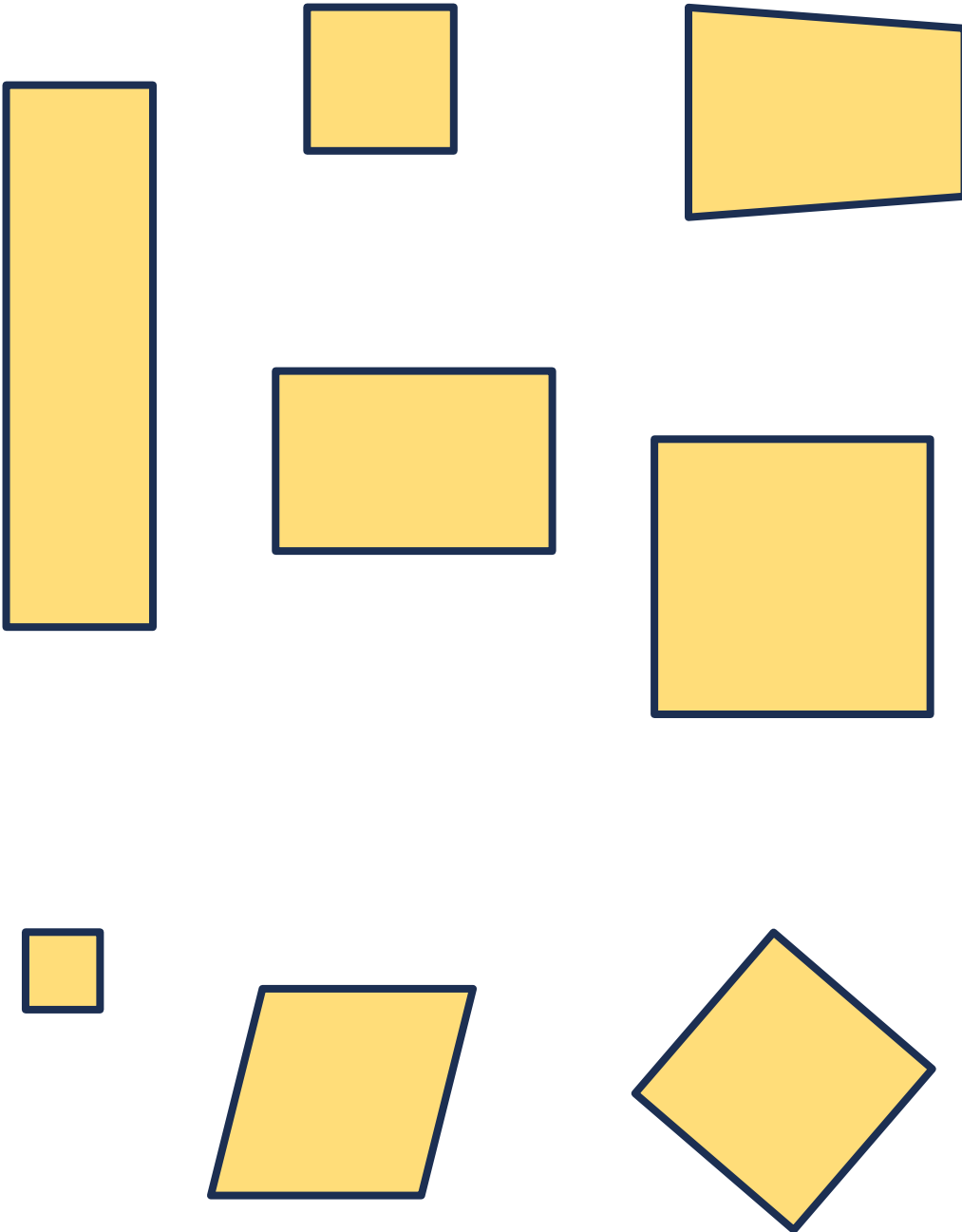
Write an "R" inside the shapes that are rectangles.



LEARNING ACTIVITY SHEET 2

Am I a Square?

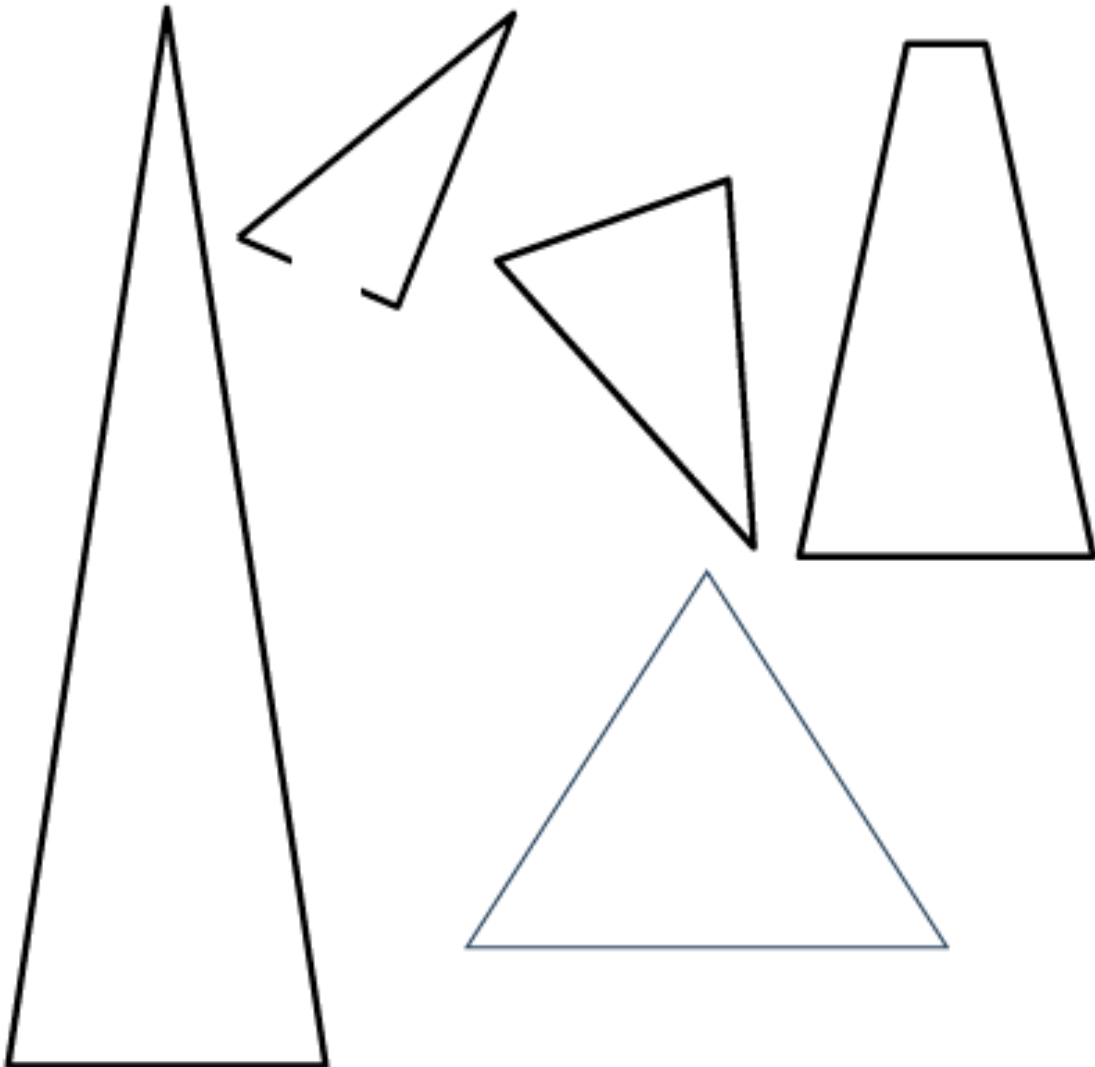
Write an "S" inside the shapes that are squares.



LEARNING ACTIVITY SHEET 3

Am I a Triangle?





Write an "T" inside the shapes that are triangles.







LEARNING ACTIVITY SHEET 4

Circle the letter of the correct answer.



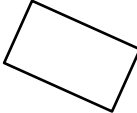
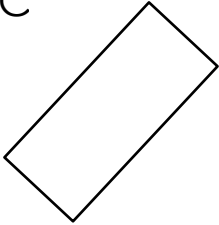
1. Which rectangle is smaller than the given rectangle?

Given: 	A 	B 	C 
---	--	---	--

2. Which rectangle is bigger than the given rectangle?

Given: 	A 	B 	C 
---	--	--	--

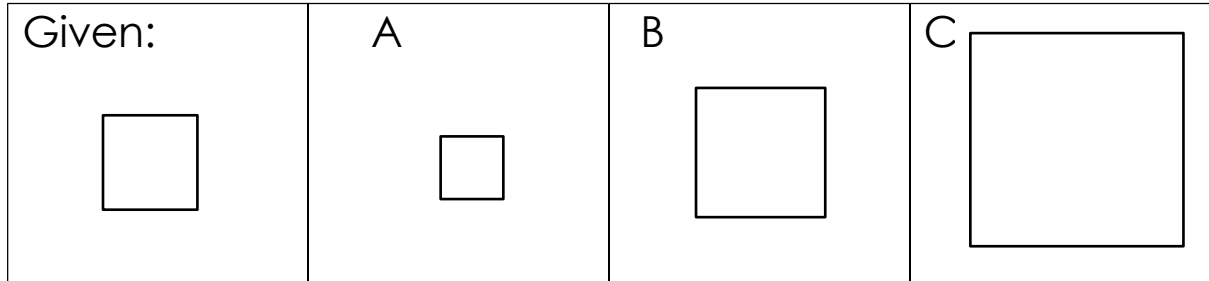
3. The orientation of the given rectangle has been changed. Which of the following shows the new position of the given rectangle?

Given: 	A 	B 	C 
---	--	---	--

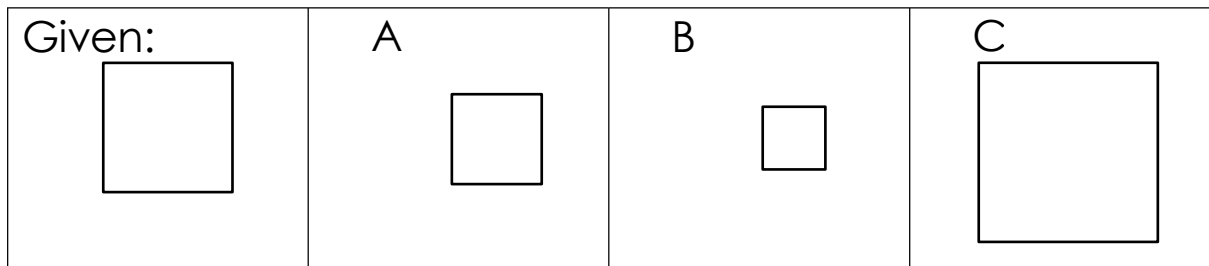
LEARNING ACTIVITY SHEET 5

Circle the letter of the correct answer.

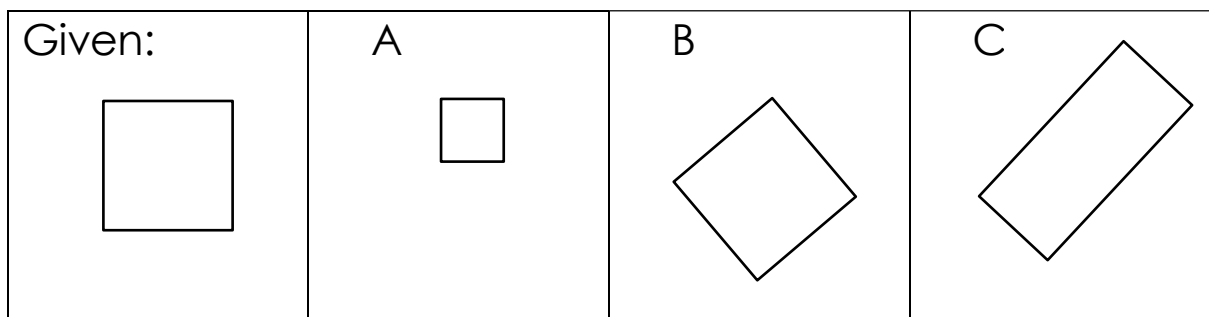
1. Which square is smaller than the given square?



2. Which square is bigger than the given square?



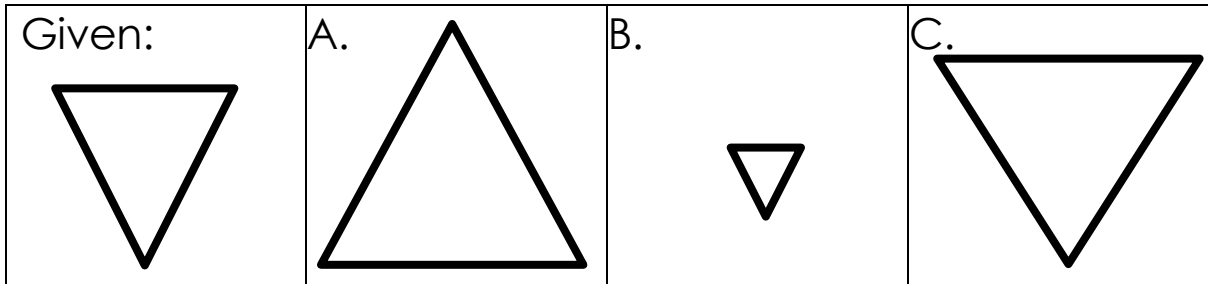
3. The orientation of the given square has been changed.
Which of the following shows the new position of the given square?



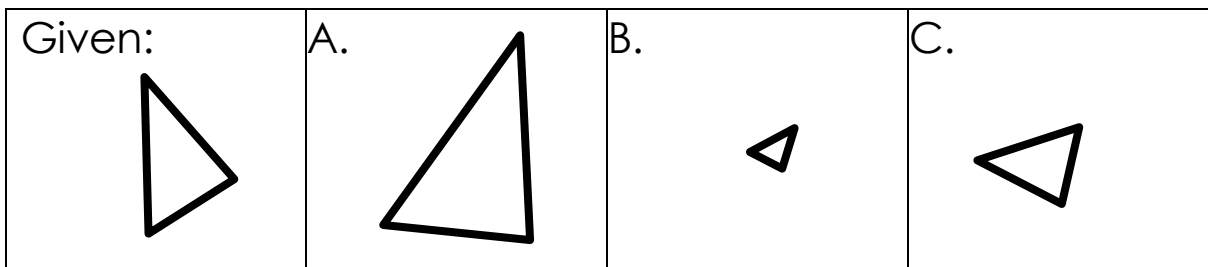
LEARNING ACTIVITY SHEET 6

Circle the letter of the correct answer.

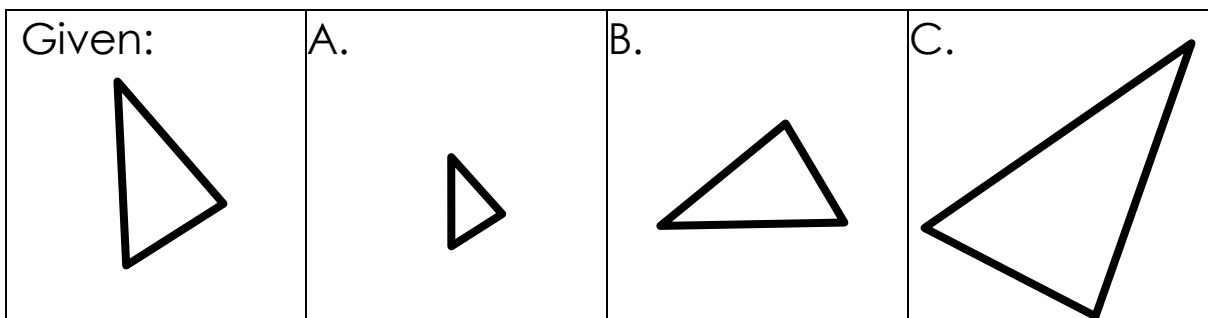
1. Which triangle is smaller than the given triangle?



2. Which triangle is bigger than the given triangle?



3. The orientation of the given triangle has been changed. Which of the following shows the new position of the given triangle?



LEARNING ACTIVITY SHEET 7

Rectangles and Squares

Part I: In the space provided, write 'S' if the object has a square, 'R' if rectangle, and 'N' if neither.



Pictures are taken from: www.canva.com

Part II: Identify each shape. Write **T** for triangle, **S** for square, and **R** for rectangle inside the shape.

